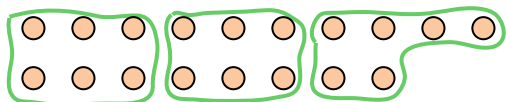






Use the shapes provided to answer the questions.

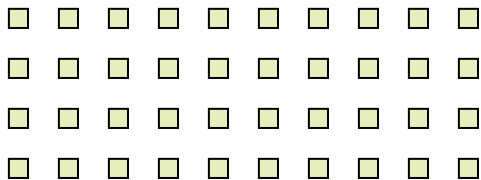
Ex) How many groups of 6 can you make with the 18 shapes below?




1) How many groups of 7 can you make with the 21 shapes below?



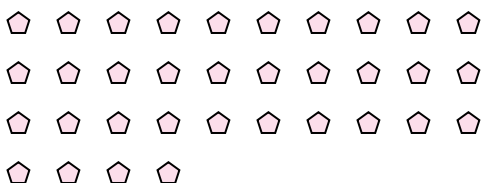
2) How many groups of 8 can you make with the 40 shapes below?




3) How many groups of 3 can you make with the 24 shapes below?




4) How many groups of 2 can you make with the 34 shapes below?



5) How many groups of 3 can you make with the 36 shapes below?



6) How many groups of 6 can you make with the 30 shapes below?



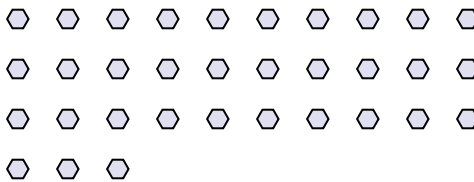
7) How many groups of 3 can you make with the 9 shapes below?



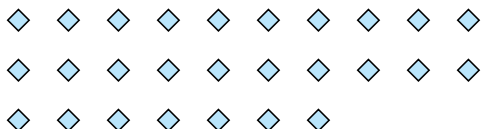
8) How many groups of 9 can you make with the 36 shapes below?



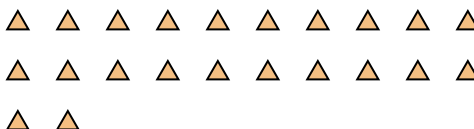
9) How many groups of 3 can you make with the 33 shapes below?



10) How many groups of 3 can you make with the 27 shapes below?



11) How many groups of 2 can you make with the 22 shapes below?



Answers

Ex. 3

1. 3

2. 5

3. 8

4. 17

5. 12

6. 5

7. 3

8. 4

9. 11

10. 9

11. 11